

## SECTION

## 2


## Reinforcement

## Fungi

**Directions:** On the line below each diagram, write the name of the fungi division that is identified with the diagram.




1. \_\_\_\_\_




2. \_\_\_\_\_



3. \_\_\_\_\_



4. \_\_\_\_\_



5. \_\_\_\_\_

6. Why are saprophytes good for the environment? \_\_\_\_\_

\_\_\_\_\_

7. In what conditions do fungi grow best? \_\_\_\_\_

8. If you find a mushroom in the wild, why shouldn't you eat it? \_\_\_\_\_

9. What makes up a lichen? \_\_\_\_\_

10. What is an ascus? \_\_\_\_\_

11. What is a basidium? \_\_\_\_\_

12. What are sporangia? \_\_\_\_\_

\_\_\_\_\_

13. How does yeast cause bread to rise? \_\_\_\_\_

\_\_\_\_\_

14. What kind of fungi causes athlete's foot? \_\_\_\_\_